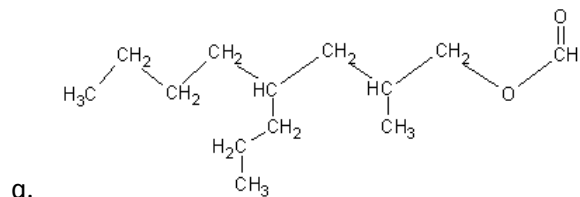
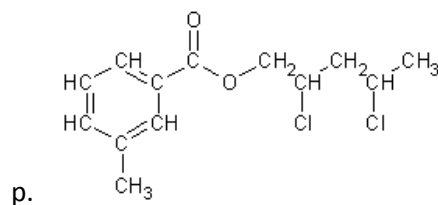
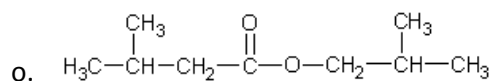
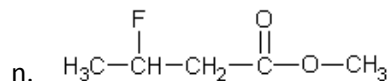
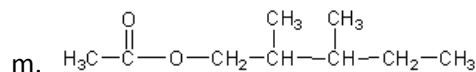
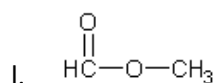
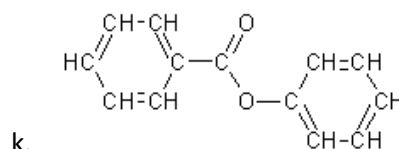
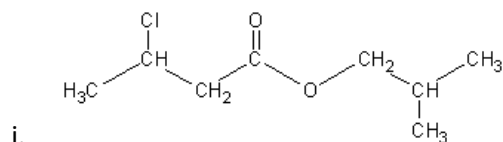
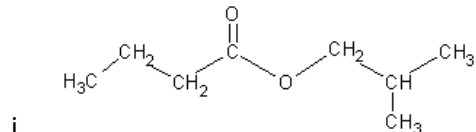
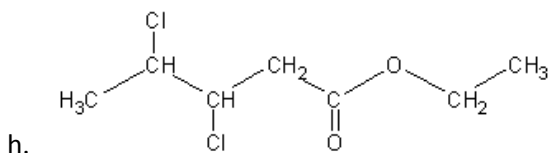
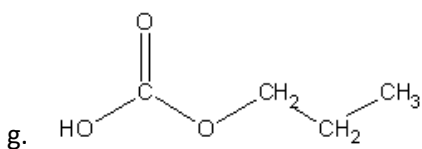
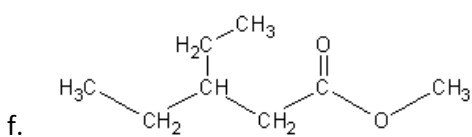
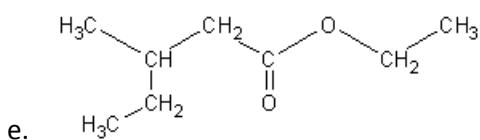
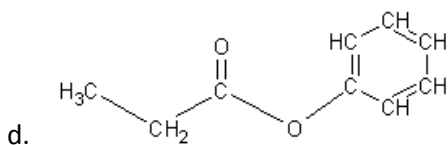
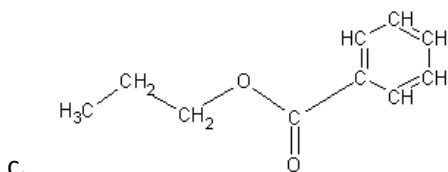
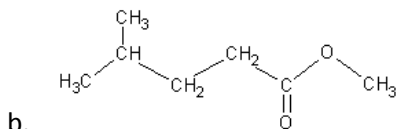
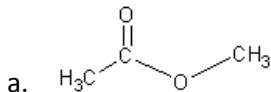


Esters Practice

1. Give the correct name for each of the following organic compounds.



2. Draw the structural formula for each of the following organic compounds.

a. methyl ethanoate

b. propyl hexanoate

c. butyl pentanoate

d. pentyl butanoate

e. methyl benzoate

f. phenyl methanoate

g. methyl heptanoate

h. ethyl 3,4-dimethylhexanoate

i. 2-methylbutyl pentanoate

j. 4-methylpentyl 3-chlorohexanoate

k. phenyl 3,4-diethyloctanoate

l. ethyl ethanoate

m. phenyl benzoate

n. 3-chlorobutyl benzoate